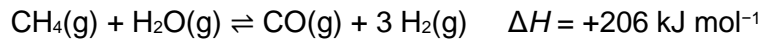


**Q1.**

Hydrogen can be prepared on an industrial scale using the reversible reaction between methane and steam.



The reaction is done at a temperature of 800 °C and a low pressure of 300 kPa in the presence of a nickel catalyst.

Explain, in terms of equilibrium yield and cost, why these conditions are used.

---

---

---

---

---

---

---

---

---

---

---

---

---

---

---

---

---

---

---

---

---

---

---

**(Total 6 marks)**

**Q2.**

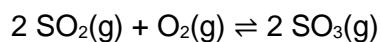
Which statement about the use of a catalyst in a reversible reaction is correct?

- A The activation energy for the reverse reaction is increased.
- B The equilibrium constant increases.
- C The rate of the reverse reaction increases.
- D The enthalpy change for the forward reaction decreases.

**(Total 1 mark)**

**Q3.**

This question is about the equilibrium



- (a) State and explain the effect, if any, of a decrease in overall pressure on the equilibrium yield of  $\text{SO}_3$

Effect \_\_\_\_\_

Explanation \_\_\_\_\_

\_\_\_\_\_

\_\_\_\_\_

**(3)**

- (b) A 0.460 mol sample of  $\text{SO}_2$  is mixed with a 0.250 mol sample of  $\text{O}_2$  in a sealed container at a constant temperature. When equilibrium is reached at a pressure of 215 kPa, the mixture contains 0.180 mol of  $\text{SO}_3$

Calculate the partial pressure, in kPa, of  $\text{SO}_2$  in this equilibrium mixture.

Partial pressure of  $\text{SO}_2$  \_\_\_\_\_ kPa

**(4)**

- (c) A different mixture of  $\text{SO}_2$  and  $\text{O}_2$  reaches equilibrium at a different temperature.

The table below shows the partial pressures of the gases at equilibrium.

Gas	Partial pressure / kPa
$\text{SO}_2$	$1.67 \times 10^2$
$\text{O}_2$	$1.02 \times 10^2$
$\text{SO}_3$	$1.85 \times 10^2$

Give an expression for the equilibrium constant ( $K_p$ ) for this reaction.

Calculate the value of the equilibrium constant for this reaction and give its units.

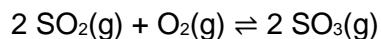
$K_p$

$K_p$  \_\_\_\_\_

Units \_\_\_\_\_

(3)

- (d) What is the effect on the value of  $K_p$  if the pressure of this equilibrium mixture is increased at a constant temperature?



Tick (✓) **one** box.

The value of  $K_p$

increases.

stays the same.

decreases.

(1)

(Total 11 marks)

#### Q4.

This question is about equilibrium.

- (a) 1 mol of a diester with molecular formula  $\text{C}_7\text{H}_{12}\text{O}_4$  is added to 1 mol of water in the presence of a small amount of catalyst. The mixture is left to reach equilibrium at a constant temperature.



At equilibrium,  $x$  mol of ethanoic acid are present in the mixture.

Complete **Table 1** by deducing the amounts, in terms of  $x$ , of the diester, water and diol present in the equilibrium mixture.

**Table 1**

Amount in the mixture / mol				
	Diester	Water	Acid	Diol
At the start	1	1	0	0
At equilibrium			$x$	

(3)

- (b) Deduce the structure of the diester in part (a)

(1)

- (c) A new equilibrium mixture of the substances from part (a) is prepared at a different temperature.



**Table 2** shows the amount of each substance in this new equilibrium mixture.

**Table 2**

Amount in the mixture / mol				
	Diester	Water	Acid	Diol
At equilibrium	0.971	To be calculated	0.452	0.273

The value of the equilibrium constant,  $K_c$  is 0.161 at this temperature.

Calculate the amount of water, in mol, in this new equilibrium mixture. Show your working.

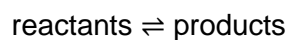
Amount of water \_\_\_\_\_ mol

**(3)**

**(Total 7 marks)**

**Q5.**

Which statement is **not** always correct for a reaction at equilibrium?

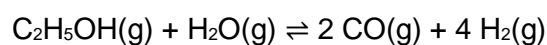


- A The concentrations of the reactants and products are equal.
- B The equilibrium can be achieved starting from the reactants.
- C The equilibrium can be achieved starting from the products.
- D The rate of the forward reaction is equal to the rate of the reverse reaction.

(Total 1 mark)

**Q6.**

Hydrogen gas can be made by reacting ethanol with steam in the presence of a catalyst.



- (a) Give an expression for  $K_c$  for this equilibrium.

State its units.

$K_c$

Units of  $K_c$  \_\_\_\_\_

(2)

- (b) The table shows the amount of each substance in an equilibrium mixture in a container of volume  $750 \text{ cm}^3$

Substance	$\text{C}_2\text{H}_5\text{OH}(\text{g})$	$\text{H}_2\text{O}(\text{g})$	$\text{CO}(\text{g})$	$\text{H}_2(\text{g})$
Amount of substance / mol	0.0750	0.156	0.110	0.220

Calculate  $K_c$

$K_c$  \_\_\_\_\_

(3)

- (c) The pressure of the equilibrium mixture was increased by reducing the volume of the container at constant temperature.

Predict the effect of increasing the pressure on the equilibrium yield of hydrogen. Explain your answer.

Predict the effect of increasing the pressure on the value of  $K_c$ .

Effect on equilibrium yield of hydrogen \_\_\_\_\_

\_\_\_\_\_

Explanation

\_\_\_\_\_

\_\_\_\_\_

\_\_\_\_\_

\_\_\_\_\_

\_\_\_\_\_

Effect on value of  $K_c$  \_\_\_\_\_

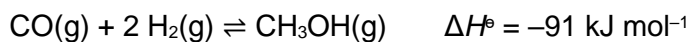
\_\_\_\_\_

(4)

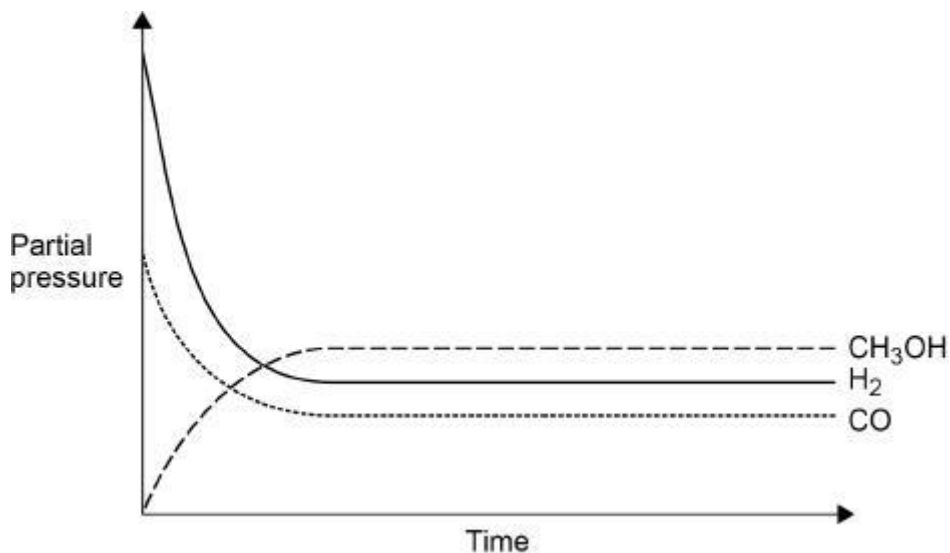
(Total 9 marks)

**Q7.**

Methanol can be manufactured in a reversible reaction as shown.



The graph below shows how the partial pressures change with time at a constant temperature.



- (a) Draw a cross (x) on the appropriate axis of the graph when the mixture reaches equilibrium. (1)
- (b) A 0.230 mol sample of carbon monoxide is mixed with hydrogen in a 1:2 mol ratio and allowed to reach equilibrium in a sealed flask at temperature  $T$ .  
At equilibrium the mixture contains 0.120 mol of carbon monoxide.  
The total pressure of this mixture is  $1.04 \times 10^4$  kPa

Calculate the partial pressure, in kPa, of hydrogen in the equilibrium mixture.

Partial pressure of hydrogen \_\_\_\_\_ kPa

(4)



- (c) Give an expression for the equilibrium constant ( $K_p$ ) for this reaction.

State the units.

$K_p$

Units \_\_\_\_\_

(2)

- (d) Some more carbon monoxide is added to the mixture in part (b). The new mixture is allowed to reach equilibrium at temperature  $T$ .

State the effect, if any, on the partial pressure of methanol and on the value of  $K_p$

Effect on partial pressure of methanol \_\_\_\_\_

Effect on value of  $K_p$  \_\_\_\_\_

(2)

- (e) State the effect, if any, of the addition of a catalyst on the value of  $K_p$  for this equilibrium.

Explain your answer.

Effect on value of  $K_p$  \_\_\_\_\_

Explanation

---

---

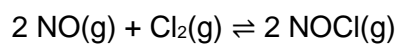
---

(2)

(Total 11 marks)

**Q8.**

Nitrogen monoxide reacts with chlorine to form nitrosyl chloride (NOCl).



- (a) 1.50 mol of NO are mixed with 1.00 mol of Cl<sub>2</sub> and the mixture is left to reach equilibrium at a given temperature.  
The equilibrium mixture contains 0.350 mol of NOCl

Calculate the amount, in moles, of NO and of Cl<sub>2</sub> in the equilibrium mixture.

Amount of NO \_\_\_\_\_ mol

Amount of Cl<sub>2</sub> \_\_\_\_\_ mol

**(2)**

- (b) Give the expression for the equilibrium constant,  $K_c$ , for the reaction between nitrogen monoxide and chlorine to form nitrosyl chloride.

$K_c =$

**(1)**

- (c) A different equilibrium mixture is prepared in a flask of volume  $800 \text{ cm}^3$  at a different temperature.

At equilibrium this mixture contains  $0.850 \text{ mol}$  of  $\text{NO}$  and  $0.458 \text{ mol}$  of  $\text{Cl}_2$

For the reaction at this temperature  $K_c = 1.32 \times 10^{-2} \text{ mol}^{-1} \text{ dm}^3$

Determine the amount, in moles, of  $\text{NOCl}$  in this equilibrium mixture.

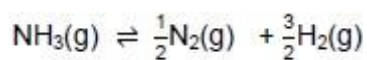
Amount of  $\text{NOCl}$  \_\_\_\_\_ mol

(4)

(Total 7 marks)

**Q9.**

When one mole of ammonia is heated to a given temperature, 50 % of it dissociates and the following equilibrium is established.



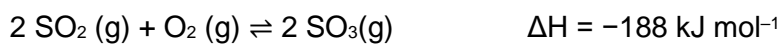
What is the total amount, in moles, of gas in this equilibrium mixture?

- A 1.5
- B 2.0
- C 2.5
- D 3.0

(Total 1 mark)

**Q10.**

Which change leads to a higher concentration of SO<sub>3</sub> in this equilibrium mixture?



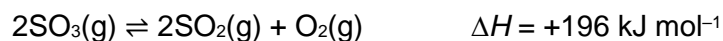
- A higher concentration of O<sub>2</sub>
- B higher temperature
- C lower pressure
- D use of a catalyst

(Total 1 mark)

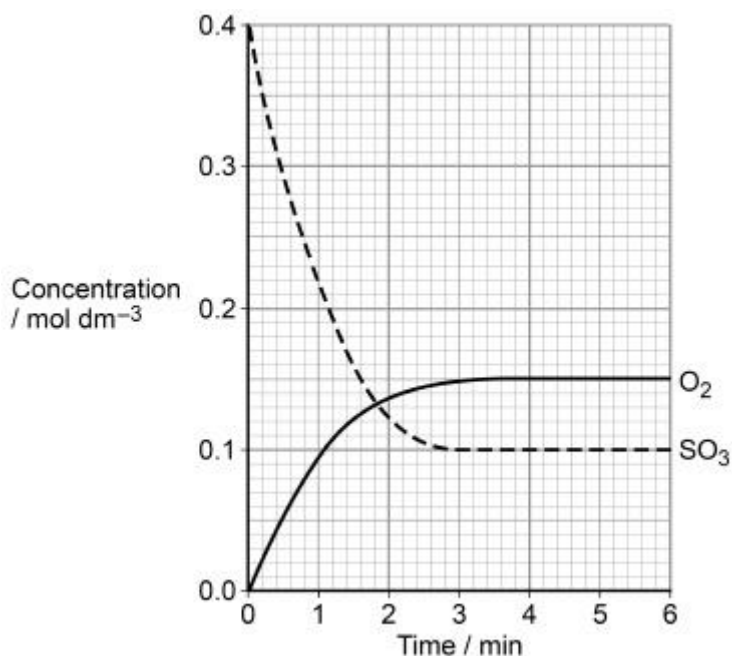
**Q11.**

This question is about equilibrium.

Sulfur trioxide decomposes to form sulfur dioxide and oxygen at temperature  $T_1$  according to the equilibrium shown.



The graph shows the concentrations of sulfur trioxide and of oxygen over a period of 6 minutes at temperature  $T_1$



- (a) State the time, to the nearest minute, when equilibrium is first established. Explain your answer.

Time \_\_\_\_\_ minutes

Explanation

---

---

---

---

---

(2)

- (b) Sketch on the graph above how the concentration of sulfur dioxide changes over these 6 minutes at temperature  $T_1$

(2)

- (c) The temperature of the mixture was changed to  $T_2$  and the mixture left to establish a new equilibrium.  
In the new equilibrium mixture the concentration of sulfur trioxide was found to be  $0.07 \text{ mol dm}^{-3}$

Deduce which of  $T_1$  and  $T_2$  is the higher temperature.  
Explain your deduction.

Higher temperature \_\_\_\_\_

Explanation

---

---

---

---

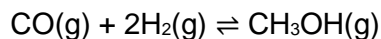
---

(2)

(Total 6 marks)

**Q12.**

Methanol can be manufactured in a reversible reaction as shown by the equation.



- (a) State and explain the effect of using a catalyst on the yield of methanol in this equilibrium.

---

---

---

---

---

---

---

**(2)**

- (b) Give an expression for the equilibrium constant ( $K_c$ ) for this reaction.

**(1)**

- (c) A mixture of carbon monoxide and hydrogen was allowed to reach equilibrium in a container of volume  $250 \text{ cm}^3$  at temperature  $T$ .

At equilibrium, the mixture contained  $0.340 \text{ mol}$  of carbon monoxide,  $0.190 \text{ mol}$  of hydrogen and  $0.0610 \text{ mol}$  of methanol.

Calculate the value of the equilibrium constant ( $K_c$ ) for this reaction at temperature  $T$ .

$$K_c \text{ _____ mol}^{-2} \text{ dm}^6$$

**(3)**

- (d) Methanol decomposes on heating in a reaction that is the reverse of that used in its manufacture.



Use your answer from part (c) to determine the value of  $K_c$  for this equilibrium at temperature  $T$ .

State the units for this value of  $K_c$ .

(If you were unable to complete the calculation in part (c), assume a value of  $K_c = 0.825 \text{ mol}^{-2} \text{ dm}^6$ . This is not the correct value.)

Value of  $K_c$  \_\_\_\_\_

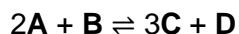
Units of  $K_c$  \_\_\_\_\_

(2)

(Total 8 marks)

**Q13.**

Compounds **A** and **B** react together to form an equilibrium mixture containing compounds **C** and **D** according to the equation



- (a) A beaker contained 40 cm<sup>3</sup> of a 0.16 mol dm<sup>-3</sup> aqueous solution of **A**.  
9.5 × 10<sup>-3</sup> mol of **B** and 2.8 × 10<sup>-2</sup> mol of **C** were added to the beaker and the mixture was left to reach equilibrium.  
The equilibrium mixture formed contained 3.9 × 10<sup>-3</sup> mol of **A**.

Calculate the amounts, in moles, of **B**, **C** and **D** in the equilibrium mixture.

Amount of **B** \_\_\_\_\_ mol

Amount of **C** \_\_\_\_\_ mol

Amount of **D** \_\_\_\_\_ mol

**(5)**

- (b) Give the expression for the equilibrium constant ( $K_c$ ) for this equilibrium **and** its units.

$K_c$

Units \_\_\_\_\_

**(2)**



- (c) A different equilibrium mixture of these four compounds, at a different temperature, contained 0.21 mol of **B**, 1.05 mol of **C** and 0.076 mol of **D** in a total volume of  $5.00 \times 10^2 \text{ cm}^3$  of solution.  
At this temperature the numerical value of  $K_c$  was 116

Calculate the concentration of **A**, in  $\text{mol dm}^{-3}$ , in this equilibrium mixture.  
Give your answer to the appropriate number of significant figures.

Concentration of **A** \_\_\_\_\_  $\text{mol dm}^{-3}$

**(3)**

- (d) Justify the statement that adding more water to the equilibrium mixture in part (c) will lower the amount of **A** in the mixture.

---

---

---

---

---

---

---

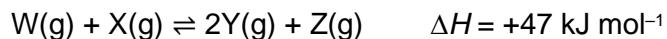
---

**(3)**

**(Total 13 marks)**

**Q14.**

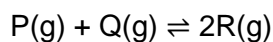
For this reaction at equilibrium, which combination of temperature and pressure would give the greatest equilibrium yield of products?



- |   |                          |
|---|--------------------------|
| <b>A</b> High pressure and high temperature | <input type="checkbox"/> |
| <b>B</b> High pressure and low temperature  | <input type="checkbox"/> |
| <b>C</b> Low pressure and high temperature  | <input type="checkbox"/> |
| <b>D</b> Low pressure and low temperature   | <input type="checkbox"/> |

**(Total 1 mark)****Q15.**

When substances **P** and **Q** react together to form substance **R** an equilibrium is established according to the equation



The equilibrium constant expression is  $K_c = \frac{[R]^2}{[P][Q]}$

1.0 mol of **P** and 1.0 mol of **Q** were mixed in a container with volume 1.0 dm<sup>3</sup>

At equilibrium,  $x$  mol of **P** had reacted.

- (a) The amount, in moles, of each of **P** and **Q** at equilibrium is  $(1 - x)$ .

Deduce in terms of  $x$  the amount, in moles, of **R** in the equilibrium mixture.

---

**(1)**

- (b) At 298 K the value of the equilibrium constant  $K_c = 3.6$

Calculate a value for the equilibrium concentration, in mol dm<sup>-3</sup>, of **R**.

Equilibrium concentration of **R** \_\_\_\_\_ mol dm<sup>-3</sup>

**(3)**

(Total 4 marks)

**Q16.**

The forward reaction in this equilibrium is endothermic



Which statement is correct?

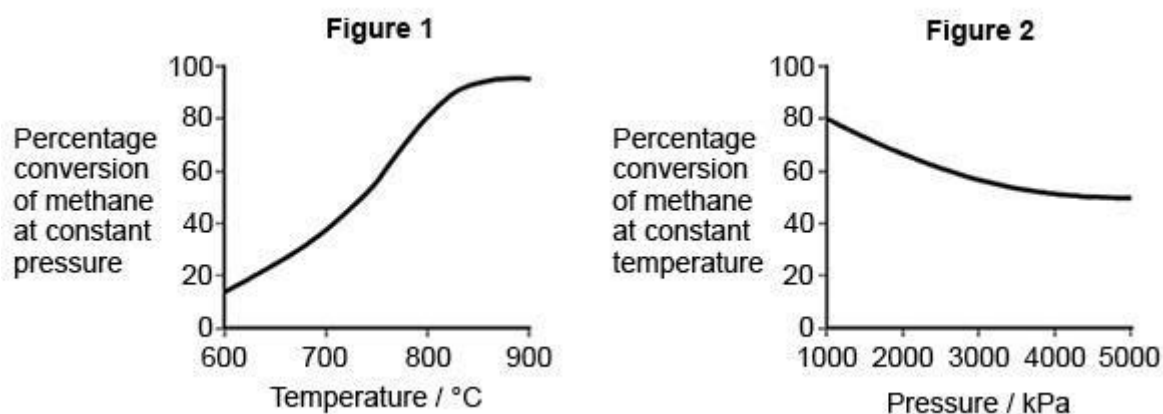
- A** If the total pressure is increased at constant temperature, the proportion of  $\text{COCl}_2$  in the equilibrium mixture will decrease
- B** Use of a catalyst will increase the proportion of  $\text{COCl}_2$  in the equilibrium mixture at constant temperature and pressure
- C** Reducing the equilibrium concentration of  $\text{CO}$  will increase the value of the equilibrium constant
- D** Raising the temperature from 373 K to 473 K will increase the value of the equilibrium constant

(Total 1 mark)

**Q17.**

There are several stages in the industrial production of methanol from methane.

- (a) The first stage involves a gaseous equilibrium between the reactants (methane and steam), and some gaseous products. **Figures 1** and **2** show the percentage conversion of methane into the gaseous products under different conditions at equilibrium.



Deduce the optimum conditions for the industrial conversion of methane and steam into the gaseous products.

Explain your deductions.

---



---

---

---

---

---

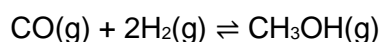
---

---

---

**(6)**

- (b) The equation shows the final stage in the production of methanol.



20.1 mol of carbon monoxide and 24.2 mol of hydrogen were placed in a sealed container. An equilibrium was established at 600 K. The equilibrium mixture contained 2.16 mol of methanol.

Calculate the amount, in moles, of carbon monoxide and of hydrogen in the equilibrium mixture.

Amount of carbon monoxide = \_\_\_\_\_ mol

Amount of hydrogen = \_\_\_\_\_ mol

**(2)**

- (c) A different mixture of carbon monoxide and hydrogen was allowed to reach equilibrium at 600 K

At equilibrium, the mixture contained 2.76 mol of carbon monoxide, 4.51 mol of hydrogen and 0.360 mol of methanol. The total pressure was 630 kPa

Calculate a value for the equilibrium constant,  $K_p$ , for this reaction at 600 K and state its units.

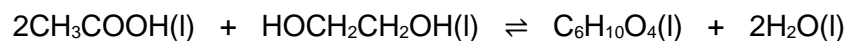
Value of  $K_p$  \_\_\_\_\_ Units \_\_\_\_\_

(6)

(Total 14 marks)

**Q18.**

Ethanoic acid and ethane-1,2-diol react together to form the diester ( $C_6H_{10}O_4$ ) as shown.



- (a) Draw a structural formula for the diester  $C_6H_{10}O_4$

(1)

- (b) A small amount of catalyst was added to a mixture of 0.470 mol of ethanoic acid and 0.205 mol of ethane-1,2-diol.

The mixture was left to reach equilibrium at a constant temperature.

Complete **Table 1**.

**Table 1**

Amount in the mixture / mol				
	$CH_3COOH$	$HOCH_2CH_2OH$	$C_6H_{10}O_4$	$H_2O$
At the start	0.470	0.205	0	0
At equilibrium	0.180			

Space for working

(3)

- (c) Write an expression for the equilibrium constant,  $K_c$ , for the reaction.

The total volume of the mixture does not need to be measured to allow a correct value for  $K_c$  to be calculated.

Justify this statement.

Expression

Justification

---

---

(2)

- (d) A different mixture of ethanoic acid, ethane-1,2-diol and water was prepared and left to reach equilibrium at a different temperature from the experiment in part (b)

The amounts present in the new equilibrium mixture are shown in **Table 2**.

**Table 2**

Amount in the mixture / mol				
	CH <sub>3</sub> COOH	HOCH <sub>2</sub> CH <sub>2</sub> OH	C <sub>6</sub> H <sub>10</sub> O <sub>4</sub>	H <sub>2</sub> O
At new equilibrium	To be calculated	0.264	0.802	1.15

The value of  $K_c$  was 6.45 at this different temperature.

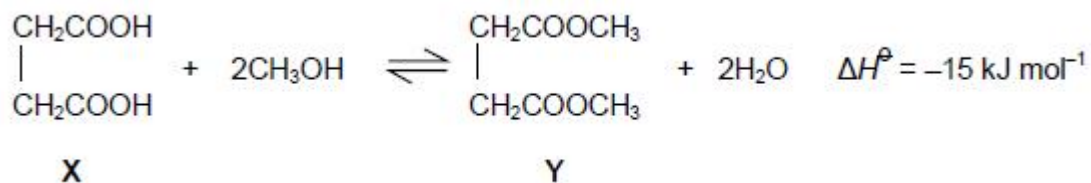
Use this value and the data in **Table 2** to calculate the amount, in mol, of ethanoic acid present in the new equilibrium mixture.

Give your answer to the appropriate number of significant figures.

Amount of ethanoic acid \_\_\_\_\_ mol

(3)

(Total 9 marks)

**Q19.**Acid **X** reacts with methanol to form an ester **Y**.

- (a) Write an expression for the equilibrium constant,  $K_c$ , for this reaction. Use **X** and **Y** in your expression.

\_\_\_\_\_

\_\_\_\_\_

(1)

- (b) A mixture of 0.32 mol of acid **X** and 0.84 mol of  $\text{CH}_3\text{OH}$  was allowed to reach equilibrium in the presence of a small amount of catalyst. The equilibrium mixture formed contained 0.26 mol of ester **Y**.

Calculate the amounts, in moles, of **X**,  $\text{CH}_3\text{OH}$  and  $\text{H}_2\text{O}$  in this equilibrium mixture.

Amount of **X**

\_\_\_\_\_

Amount of  $\text{CH}_3\text{OH}$

\_\_\_\_\_

Amount of  $\text{H}_2\text{O}$

\_\_\_\_\_

(3)

- (c) Calculate the value of  $K_c$  and state the units.

$K_c$  \_\_\_\_\_ units \_\_\_\_\_

(3)

- (d) Predict the effect on  $K_c$  if the reaction is carried out at a lower temperature.

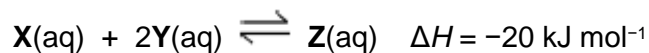
\_\_\_\_\_

(1)

(Total 8 marks)

**Q20.**

Colourless solutions of **X**(aq) and **Y**(aq) react to form an orange solution of **Z**(aq) according to the following equation.



A student added a solution containing 0.50 mol of **X**(aq) to a solution containing 0.50 mol of **Y**(aq) and shook the mixture.

After 30 seconds, there was no further change in colour.

The amount of **Z**(aq) at equilibrium was 0.20 mol.


- (a) Deduce the amounts of **X**(aq) and **Y**(aq) at equilibrium.

Amount of **X**(aq) = \_\_\_\_\_ mol      Amount of **Y**(aq) = \_\_\_\_\_  
mol

**(2)**

- (b) On the grid below, draw a graph to show how the amount of **Z**(aq) changed from the time of initial mixing until 60 seconds had elapsed.





(3)

- (c) The student prepared another equilibrium mixture in which the equilibrium concentrations of **X** and **Z** were:  
**X**(aq) = 0.40 mol dm<sup>-3</sup> and **Z**(aq) = 0.35 mol dm<sup>-3</sup>.

For this reaction, the equilibrium constant  $K_c = 2.9 \text{ mol}^{-2} \text{ dm}^6$ .

Calculate a value for the concentration of **Y** at equilibrium.

Give your answer to the appropriate number of significant figures.

$$[\text{Y}] = \text{_____ mol dm}^{-3}$$

(3)

- (d) The student added a few drops of  $\text{Y(aq)}$  to the equilibrium mixture of  $\text{X(aq)}$ ,  $\text{Y(aq)}$  and  $\text{Z(aq)}$  in part (c).

Suggest how the colour of the mixture changed. Give a reason for your answer.

Colour change \_\_\_\_\_

Reason

---

---

---

---

**(3)**

- (e) The student warmed the equilibrium mixture from part (c).

Predict the colour change, if any, when the equilibrium mixture was warmed.

---

---

**(1)**